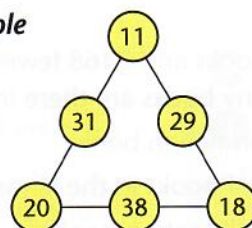


TARGET To solve number puzzles involving addition and subtraction.

In these triangular arithmagons the pair of numbers at the end of each side are added together to give the number between them.

Example

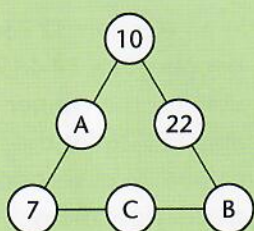


$$\begin{aligned} 11 + 18 &= 29 \\ 18 + 20 &= 38 \\ 20 + 11 &= 31 \end{aligned}$$

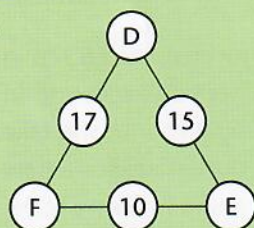
Find the missing numbers in these arithmagons.

A

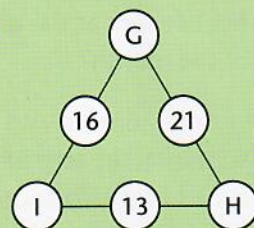
1



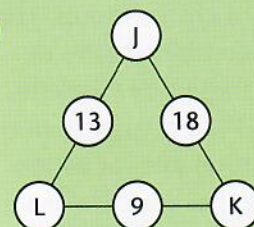
2



3

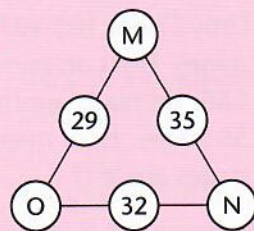


4

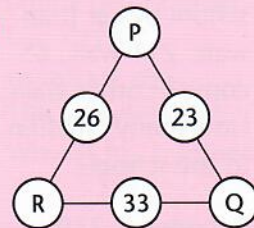


B

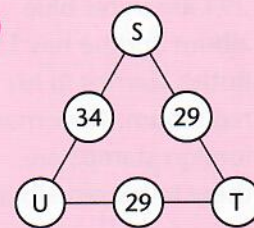
1



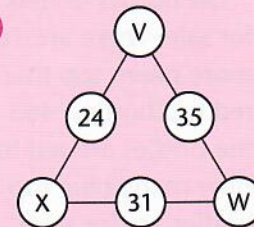
2



3

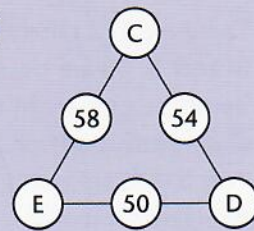


4

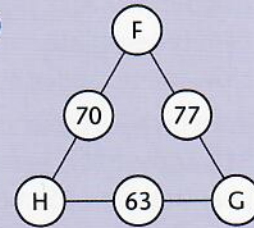


C

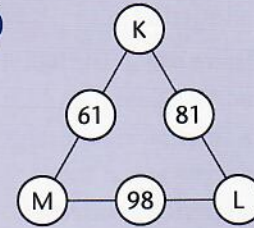
1



2



3



4

