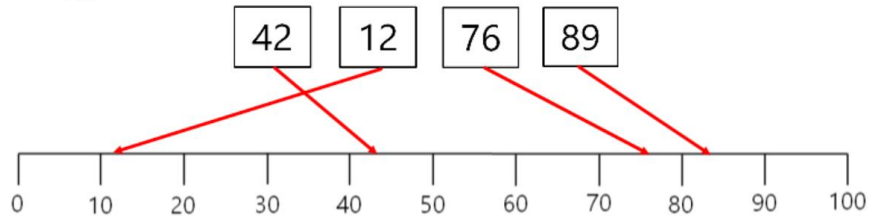




Kim

Kim has drawn some lines to show where numbers go on a numberline

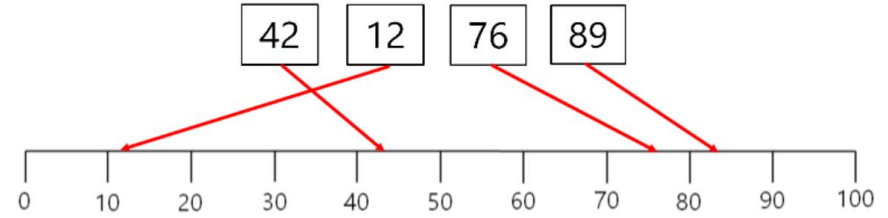


Is she correct?  
How do you know?



Kim

Kim has drawn some lines to show where numbers go on a numberline

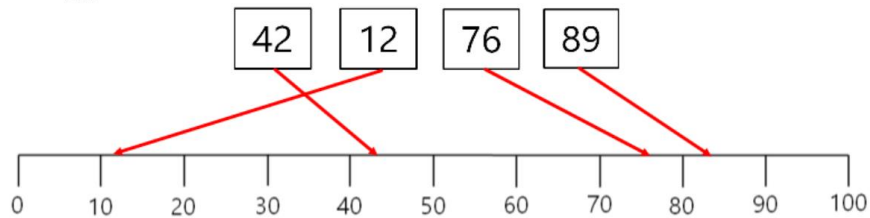


Is she correct?  
How do you know?



Kim

Kim has drawn some lines to show where numbers go on a numberline

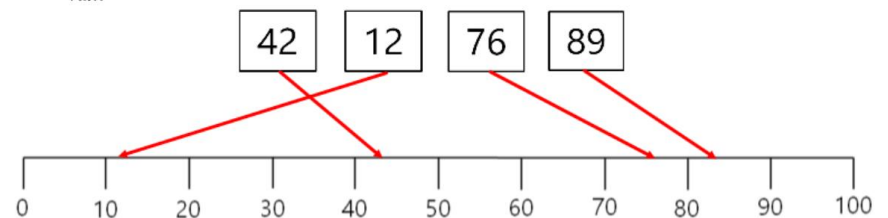


Is she correct?  
How do you know?



Kim

Kim has drawn some lines to show where numbers go on a numberline



Is she correct?  
How do you know?