



When you double a number the answer is always even.

Is this true?
Explain how you know.




When you double a number the answer is always even.

Is this true?
Explain how you know.



When you double a number the answer is always even.

Is this true?
Explain how you know.



When you double a number the answer is always even.

Is this true?
Explain how you know.