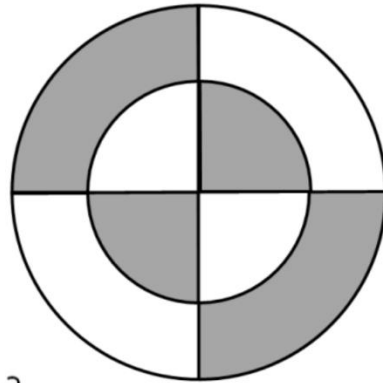




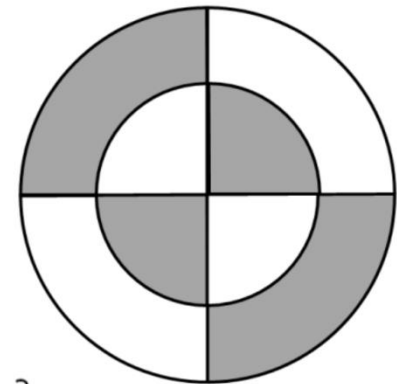
I think $\frac{1}{2}$ of the shape is shaded.



Do you agree with Tom?
How do you know?



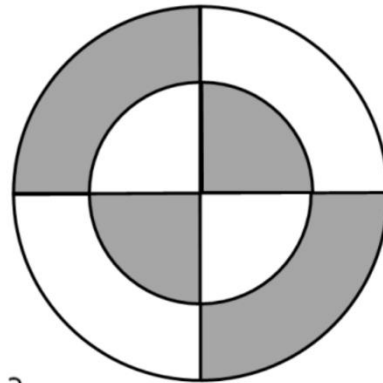
I think $\frac{1}{2}$ of the shape is shaded.



Do you agree with Tom?
How do you know?



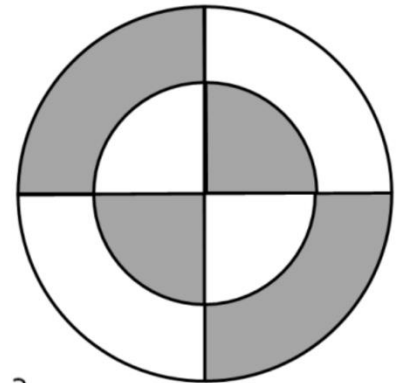
I think $\frac{1}{2}$ of the shape is shaded.



Do you agree with Tom?
How do you know?



I think $\frac{1}{2}$ of the shape is shaded.



Do you agree with Tom?
How do you know?