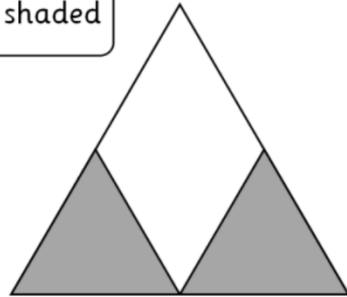




$\frac{1}{2}$  of the shape is shaded



It can't be  
because there  
are 3 parts



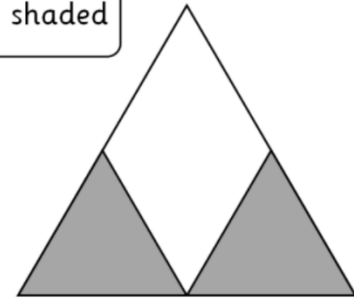
Who is right?  
How do you know?



$\frac{1}{2}$  of the shape is shaded



It can't be  
because there  
are 3 parts



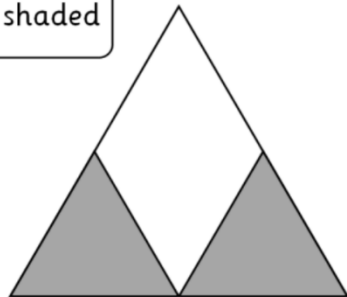
Who is right?  
How do you know?



$\frac{1}{2}$  of the shape is shaded



It can't be  
because there  
are 3 parts



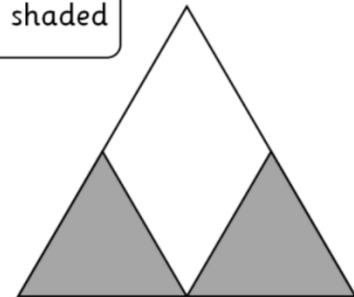
Who is right?  
How do you know?



$\frac{1}{2}$  of the shape is shaded



It can't be  
because there  
are 3 parts



Who is right?  
How do you know?