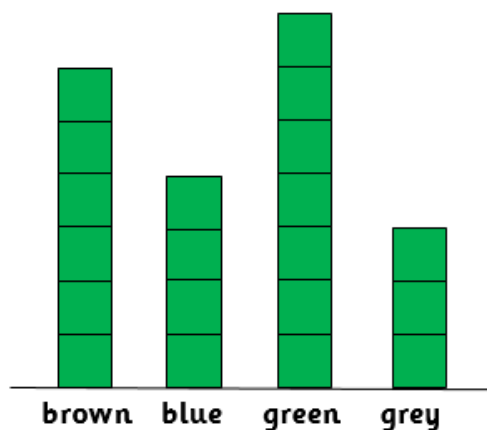


Guided Learning Task 1 (Answer the questions).

Colour of Eyes in Class 2



How many children have **blue** eyes? _____

How many children have **green** eyes? _____

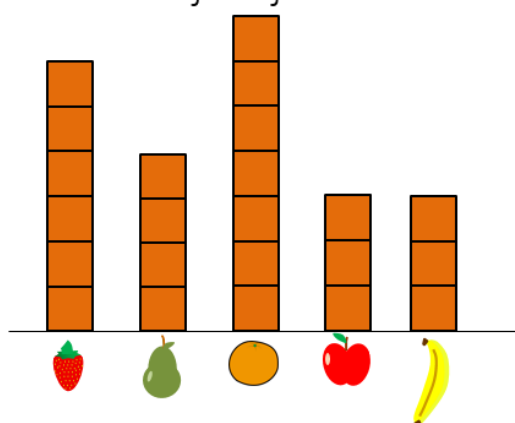
What is the **most common** eye colour? _____

What is the **least common** eye colour? _____

How many children are in Class 2? _____

Guided Learning Task 2 (Answer the questions).

Favourite fruit of Class 2



How many children like bananas the best? _____



How many more people like orange than apple? _____

How many fewer people like banana than pear? _____

How many children in Class 2 **altogether**? _____

Independent Learning Tasks

Count the fruit and construct a block graph.

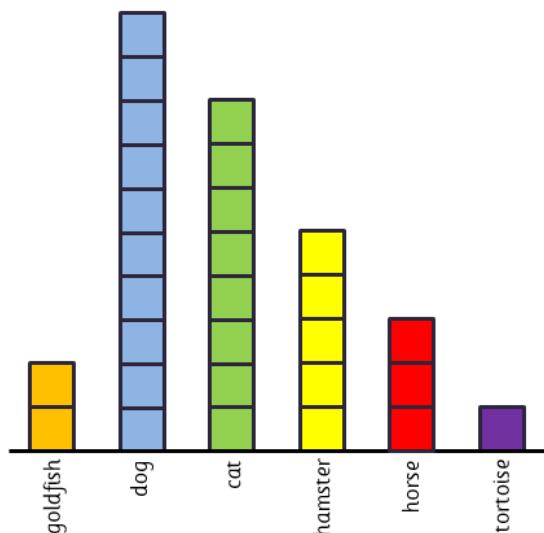


Which is the **most common** fruit? _____

Which is the **least common** fruit? _____

How many more limes than pears? _____

How many fewer oranges than bananas? _____



Class 2 made a table of their favourite pet.
Use the table to complete the statements.

Three people like a _____ the most.

More children like a _____ than a cat.

There are _____ children in Class 2.

Fewer people like a _____ than a hamster.